

# Electrotechnology

## Section II

35 marks

Attempt Questions 16–24




Allow about 45 minutes for this section

Answer the questions in the spaces provided.

---

### Question 16 (3 marks)

Identify the meaning of each symbol in the table.

|     | <i>Symbol</i>   | <i>Meaning</i>                  |   |
|-----|---|---------------------------------|---|
| (a) |    | <i>Variable Resistor</i>        | 1 |
| (b) |   | <i>Light dependent resistor</i> | 1 |
| (c) |  | <i>Resistor</i>                 | 1 |