

Geography

Section II (continued)

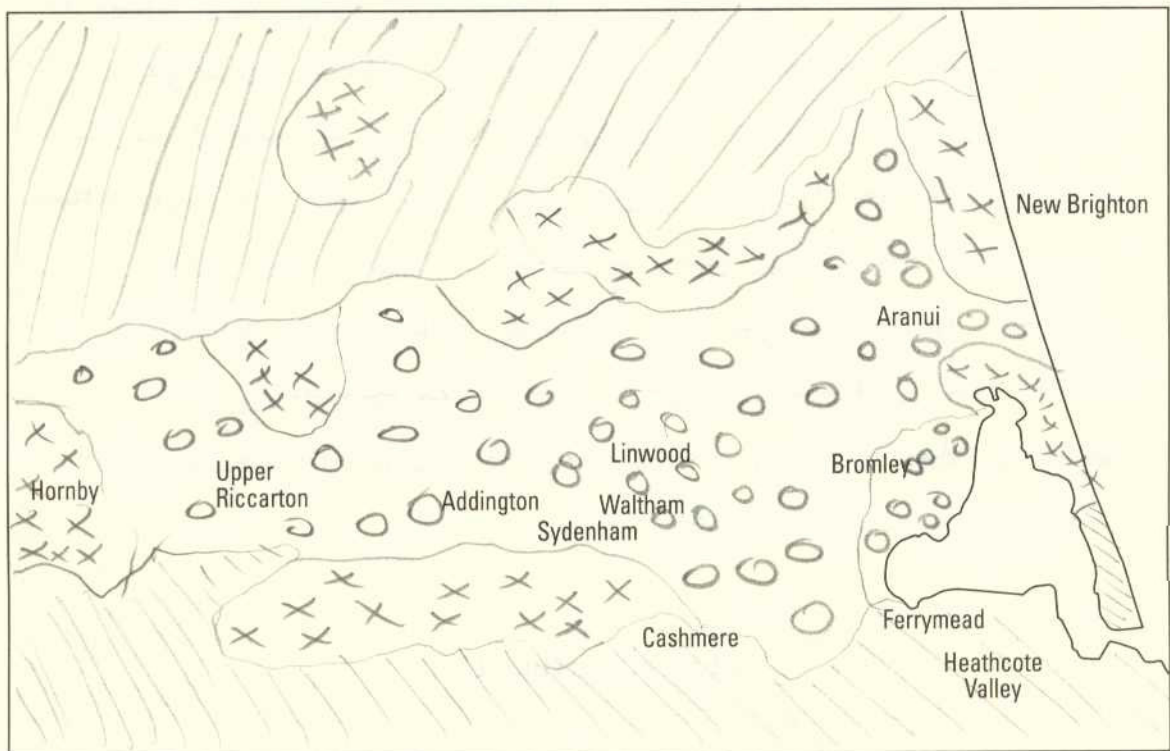
Marks

Question 17 (9 marks)




(a) Refer to Source C.

Draw a simplified choropleth map to show the distribution of deprivation in Christchurch.

3



KEY

-  Most deprived
-  Mixed
-  Least deprived

Question 17 continues on page 14

Question 17 (continued)

- (b) Refer to Sources C, D, F, H and I.

From these sources, name TWO locations within Christchurch that demonstrate different urban dynamics, and account for these differences.

6

~~They~~ Lyttelton Harbour depicted in source C and source H is an example of an urban village as although apart from major urban areas, continues an urban lifestyle. People move to Lyttelton Harbour through exurbanisation to enjoy both the aesthetic qualities such as cleaner air, whilst still enjoying a largely urban lifestyle. Urban consolidation is taking place in the Linwood area of Christchurch. Property sizes are small, and the population denser which could account for the high deprivation index. The lifestyle in Linwood would be generally worse than Lyttelton Harbour as the density and lack of surrounding rural, aesthetically pleasing areas diminishes quality of living.

End of Question 17