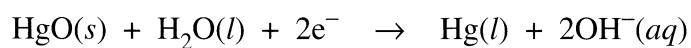
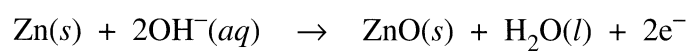
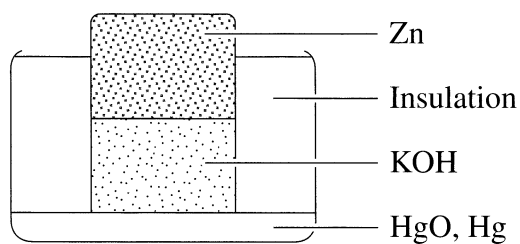


**Question 27** (2 marks)

The diagram shows a particular cell with relevant half equations.

2



Identify the anode, cathode and electrolyte for this cell.

~~zinc~~ anode = zinc  
 cathode = HgO  
 electrolyte = KOH